



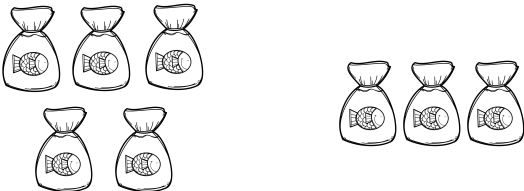



Using Pictures to Add 1.1



Name _____

Count the pictures and write the total on the line.

<p>1.</p>  <p>3 ice cream cones and 2 ice cream cones</p> <p>_____ cones</p>	<p>2.</p>  <p>2 baseballs and 4 baseballs</p> <p>_____ baseballs</p>
<p>3.</p>  <p>1 hotdog and 3 hotdogs</p> <p>_____ hotdogs</p>	<p>4.</p>  <p>4 ducks and 1 duck</p> <p>_____ ducks</p>
<p>5.</p>  <p>5 fish and 3 fish</p> <p>_____ fish</p>	<p>6.</p>  <p>3 bowls and 3 bowls</p> <p>_____ bowls</p>